

**OXFORD CAMBRIDGE AND RSA EXAMINATIONS
GCSE**

A181/02

**TWENTY FIRST CENTURY SCIENCE
PHYSICS A/SCIENCE A**

Modules P1 P2 P3 (Higher Tier)

WEDNESDAY 24 MAY 2017: Afternoon

**DURATION: 1 hour
plus your additional time allowance**

MODIFIED ENLARGED

| | | | |
|-------------------------------|--|------------------------------|--|
| Candidate forename | | Candidate surname | |
|-------------------------------|--|------------------------------|--|

| | | | | | | | | | | |
|--------------------------|--|--|--|--|--|-----------------------------|--|--|--|--|
| Centre number | | | | | | Candidate number | | | | |
|--------------------------|--|--|--|--|--|-----------------------------|--|--|--|--|

**Candidates answer on the Question Paper.
A calculator may be used for this paper.**

**OCR SUPPLIED MATERIALS:
None**

**OTHER MATERIALS REQUIRED:
Pencil
Ruler (cm/mm)**

READ INSTRUCTIONS OVERLEAF



INSTRUCTIONS TO CANDIDATES

Write your name, centre number and candidate number in the boxes on the first page. Please write clearly and in capital letters.

Use black ink. HB pencil may be used for graphs and diagrams only.

Answer ALL the questions.

Read each question carefully. Make sure you know what you have to do before starting your answer.

Write your answer to each question in the space provided. If additional space is required, you should use the lined page(s) at the end of this booklet. The question number(s) must be clearly shown.

INFORMATION FOR CANDIDATES

The quality of written communication is assessed in questions marked with a pencil ().

A list of physics equations is printed on pages 4 and 5.

The number of marks is given in brackets [] at the end of each question or part question.

The total number of marks for this paper is 60.

Any blank pages are indicated.

BLANK PAGE

TWENTY FIRST CENTURY SCIENCE DATA SHEET

Useful relationships

The Earth in the Universe

$$\text{distance} = \text{wave speed} \times \text{time}$$

$$\text{wave speed} = \text{frequency} \times \text{wavelength}$$

Sustainable energy

$$\text{energy transferred} = \text{power} \times \text{time}$$

$$\text{power} = \text{voltage} \times \text{current}$$

$$\text{efficiency} = \frac{\text{energy usefully transferred}}{\text{total energy supplied}} \times 100\%$$

Explaining motion

$$\text{speed} = \frac{\text{distance travelled}}{\text{time taken}}$$

$$\text{acceleration} = \frac{\text{change in velocity}}{\text{time taken}}$$

$$\text{momentum} = \text{mass} \times \text{velocity}$$

$$\text{change of momentum} = \text{resultant force} \times \text{time for which it acts}$$

$$\text{work done by a force} = \text{force} \times \text{distance moved in the direction of the force}$$

$$\text{amount of energy transferred} = \text{work done}$$

$$\text{change in gravitational potential energy} = \text{weight} \times \text{vertical height difference}$$

$$\text{kinetic energy} = \frac{1}{2} \times \text{mass} \times [\text{velocity}]^2$$

Electric circuits

$$\text{power} = \text{voltage} \times \text{current}$$

$$\text{resistance} = \frac{\text{voltage}}{\text{current}}$$

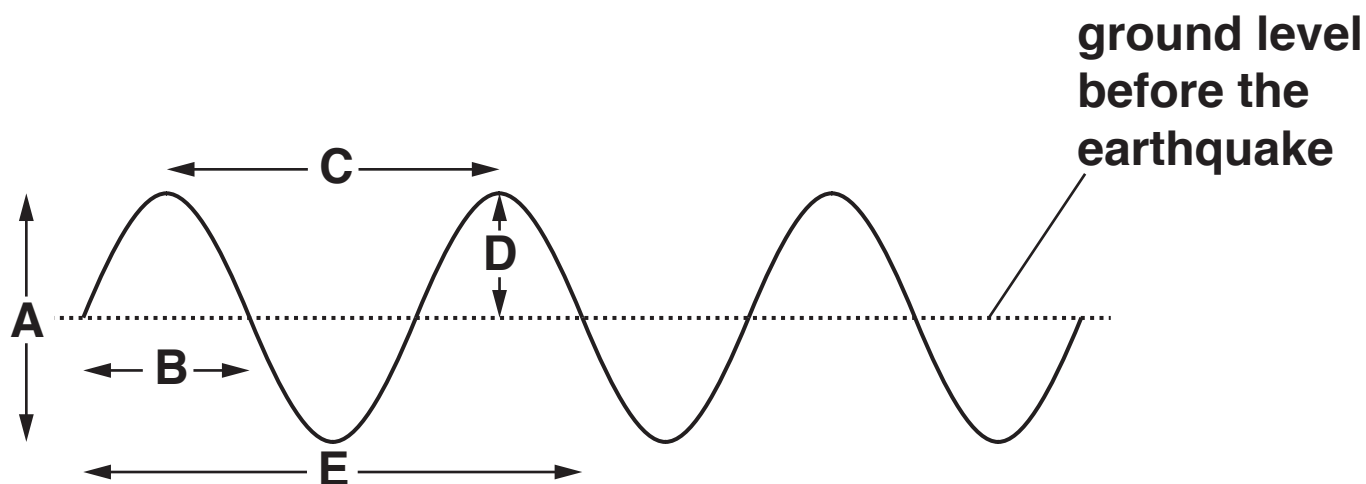
$$\frac{\text{voltage across primary coil}}{\text{voltage across secondary coil}} = \frac{\text{number of turns in primary coil}}{\text{number of turns in secondary coil}}$$

Radioactive materials

$$\text{energy} = \text{mass} \times [\text{speed of light in a vacuum}]^2$$

Answer ALL the questions.

- 1 The diagram below shows the ground moving when an earthquake wave passes. The dotted line shows the ground level before the earthquake arrived.



The wave diagram has five different arrows labelled A, B, C, D and E.

- (a) Which arrow, A, B, C, D or E, shows the **AMPLITUDE** of the wave?

the amplitude is shown by arrow _____ [1]

- (b) Which arrow, A, B, C, D or E, shows the **WAVELENGTH** of the wave?

the wavelength is shown by arrow _____ [1]

- (c) The wave in the diagram has a wavelength of 1 km and a frequency of 2 Hz.

Calculate the speed of the wave in m/s.

Show your working.

speed = _____ m/s [2]

[TOTAL: 4]

2 This question is about earthquake waves.

(a) P-waves travel at 8.1 km/s and S-waves travel at 5.1 km/s. A small earthquake occurs in Usak in Turkey.

The waves are detected in Bursa, which is a distance of 169km away.



Show that the P-waves will arrive at Bursa about 12 seconds before the S-waves.

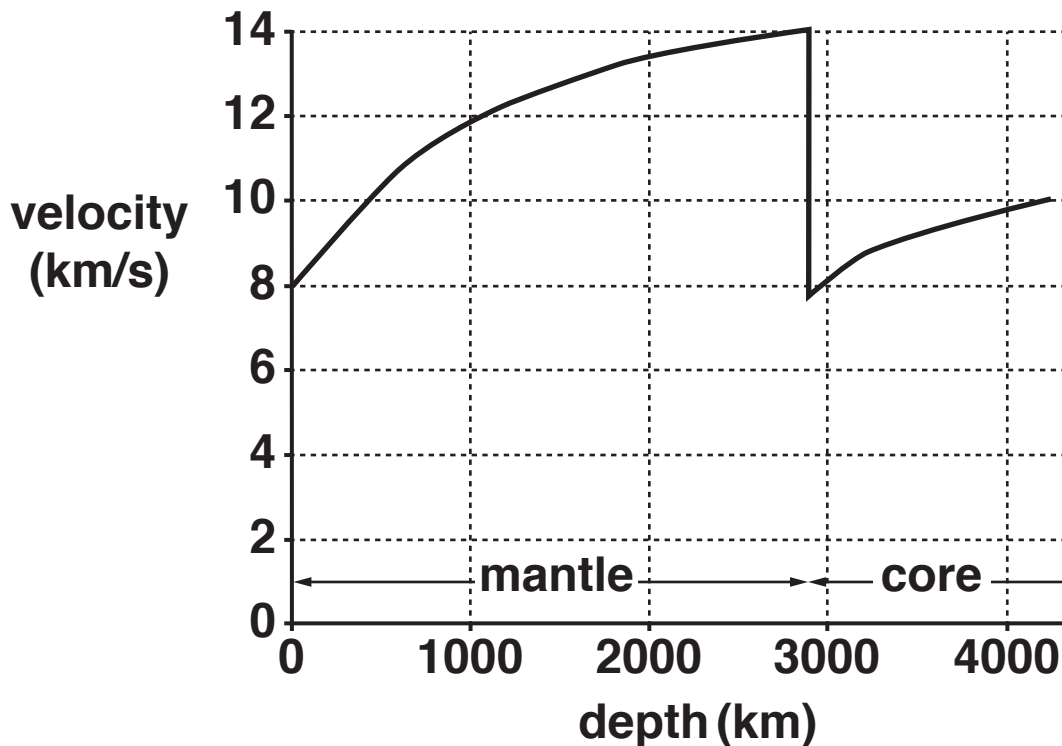
time difference = _____ s [2]

(b) Earthquakes are common in Turkey but are very rare in Britain.

State ONE reason for this.

[1]

(c) As a P-wave travels deeper into the Earth, its speed changes as shown below.



A P-wave has wavelength of 2000 m when it enters the Earth's mantle.

Explain why the graph shows that its wavelength will be 3500 m just before it enters the Earth's core.

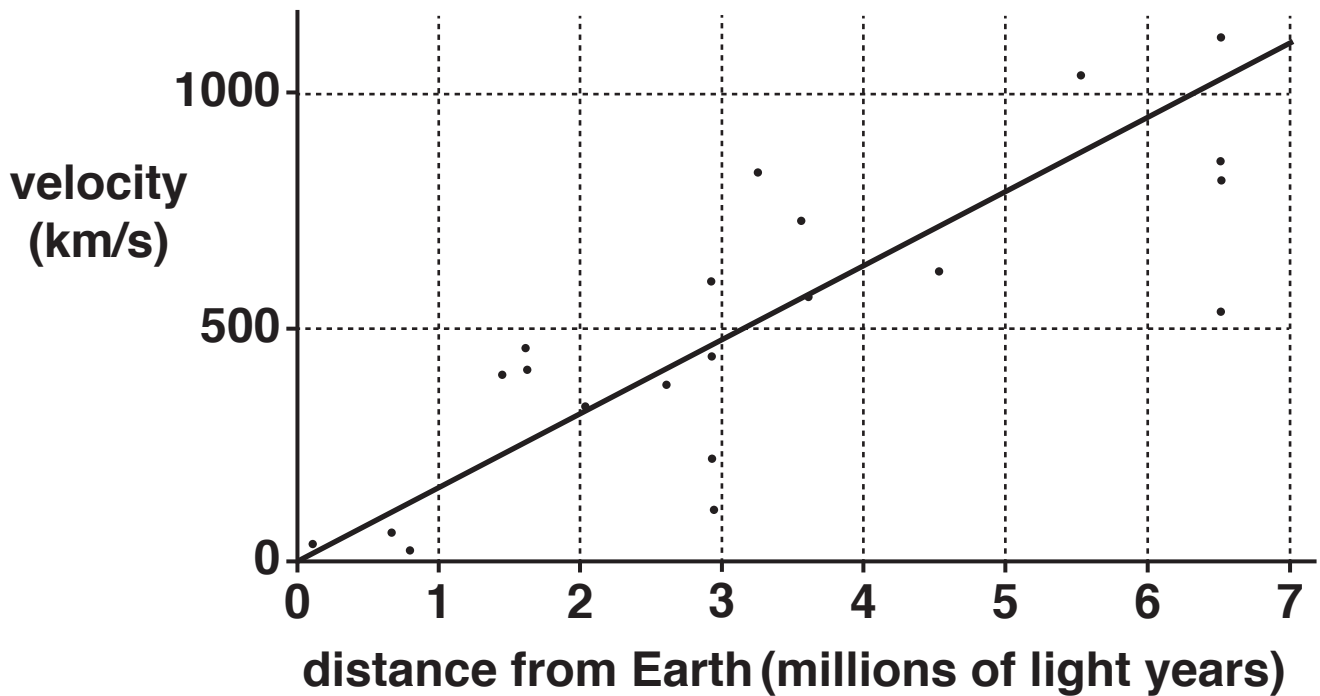
[3]

[TOTAL: 6]

BLANK PAGE

3 In 1929, the astronomer Edwin Hubble published the results of his observations of galaxies. He found that most were moving away from us, and his results for their velocities are shown in the graph below.

The line shown is Hubble's own best-fit line for the data.



(a) Describe what the graph shows about the relationship between the velocities and distances of galaxies.

[2]

(b) Explain why other astronomers, seeing these data, were keen to measure the distances and velocities of these and other galaxies themselves.

[2]

[TOTAL: 4]

4 In 1842, the French philosopher, Comte, said, ‘No-one will ever be able to analyse the chemical composition of stars.’ Within a decade, the German chemists Bunsen and Kirchhoff discovered that certain frequencies of light acted as ‘fingerprints’ of the elements present in the source of light.

This was soon applied to stars and it was found that the Sun contains an element not previously known: helium. It is now known that helium is the second most common element in the Universe after hydrogen. These two elements were created in the ‘Big Bang’.

The same technique applied to galaxies showed that some of the ‘fingerprints’ were seen at longer wavelengths than astronomers had expected.

Describe and explain what observations of stars and galaxies have revealed about the nature of the Universe and the elements it contains.



The quality of written communication will be assessed in your answer.

[6]

[TOTAL: 6]

- 5 The following table shows typical frequencies for some parts of the electromagnetic spectrum. The frequencies are measured in GHz, where $1 \text{ GHz} = 1 \times 10^9 \text{ Hz}$.

| Type of radiation | Microwave | Infrared | Visible light | Ultraviolet | X-ray |
|-------------------|-----------|----------|---------------|-------------|--------------------|
| Frequency in GHz | 2 | 1000 | 550000 | 30 million | 3 thousand million |

- (a) Here are a number of statements about electromagnetic radiation. Some are true and some are false.

Put a tick (✓) in the correct box after each statement below. [2]

| | TRUE | FALSE |
|--|--------------------------|--------------------------|
| Radiation of greater frequencies than X-rays are emitted by some materials. | <input type="checkbox"/> | <input type="checkbox"/> |
| Any radiation of frequency greater than 30 million GHz will damage living cells. | <input type="checkbox"/> | <input type="checkbox"/> |
| Radiation of frequencies less than 1000 GHz cannot be used in communication. | <input type="checkbox"/> | <input type="checkbox"/> |
| No radiation of frequency greater than 550 000 GHz can penetrate the Earth's atmosphere. | <input type="checkbox"/> | <input type="checkbox"/> |

(b) The speed of light is 3.0×10^8 m/s.

Calculate the typical wavelength of visible light.

**Write your answer in nanometres (nm), where
 $1 \text{ nm} = 1 \times 10^{-9} \text{ m}$.**

Give your answer to ONE significant figure.

wavelength = _____ nm [3]

[TOTAL: 5]

6 About 100 years ago, Albert Einstein showed that beams of electromagnetic radiation behave like streams of particles (photons) rather than continuous waves.

This discovery allows physicists to explain a range of different observations such as:

Some parts of the electromagnetic spectrum can cause chemical reactions to take place but others cannot.

Ultraviolet radiation can cause skin cancer, but visible light cannot.

When violet light shines on calcium metal, electrons are given off, but this does not happen for red light, even if it is very bright.

Use Einstein's discovery to explain these observations in terms of photons.




The quality of written communication will be assessed in your answer.

[6]

[TOTAL: 6]

- 7 'Fracking' is a process which is used to extract methane gas, a fossil fuel, for use in power stations. It involves drilling down into rocks, and using high-pressure water to fracture the rocks and drive out the gas.**



The Government has suggested that this process could supply much of the energy the country needs. It has been suggested that this could happen in places like National Parks.

Jane is worried about the effects of fracking.

Jane says 'I'm worried about the effects on the environment. There could be a lot of damage both at the global level, affecting the whole planet, and at the local level, right here where we live.'

(a) Suggest and explain damage to the environment AT THE GLOBAL LEVEL which could result from using the gas produced in this way.

[2]

(b) Suggest and explain damage to the environment AT THE LOCAL LEVEL which could result from introducing fracking.

[2]

[TOTAL: 4]

8 Sam is watching a high-definition (HD) digital television.

(a) HD film needs more bytes of information than standard-definition (SD) film.

Which of the following is a possible explanation for this?

Put a tick (✓) in the box after the correct explanation.

Digital images are not affected by noise.

HD signals travel faster than SD signals.

Digital signals consist of a series of 0s and 1s.

HD films have much clearer images than SD films.

[1]

(b) Each byte of digital data is made of 8 BITS, where a bit is one of the symbols 0 and 1.

Sam is downloading and saving a programme to watch later. The programme contains 720 MB of data. (1 MB = 1 megabyte = 1 000 000 bytes)

(i) Calculate the number of BITS the programme will need.

number = _____ [2]

- (ii) Sam can download the programme at a rate of 21 megabits per second.

Calculate the time that it will take the whole programme to download.

time = _____ seconds [2]

[TOTAL: 5]

- 9 **New providers of electricity are attempting to gain customers who are concerned about the environment.**

Here is the advertisement for one provider:

OCR Green Energy – the way forward

**Change to our company,
and we can guarantee
that all your electricity
will come from renewable
sources – wind, solar, water
and biofuel.**

**Do your bit to combat global
warming!**

**And that's not all – we're cheaper than the big energy
suppliers, too!**

**For more information, see our website
www.OCRGreen.com**



A householder is thinking about changing to this energy provider.

Discuss the advantages and disadvantages, for the householder and for the country as a whole, of making this change.



The quality of written communication will be assessed in your answer.

[6]

[TOTAL: 6]

- 10 Electrical appliances which use the 230 V electrical sockets in the house have plugs that are fitted with fuses. In the event of an electrical fault, the fuse ‘blows’ (melts) and switches off the device.**

Each fuse is designed to allow a current which is a bit larger than the maximum current the appliance usually takes. The available fuses are rated at 3 A, 5 A and 13 A.

- (a) For each of the following appliances, write down the maximum current which the appliance takes and the fuse which should be used in the plug.**

The first one has been done for you. [3]

| appliance | maximum power | maximum current | fuse |
|------------------------|----------------------|------------------------|-------------|
| dish washer | 2300 W | 10 A | 13 A |
| hair dryer | 1.8 kW | | |
| laptop computer | 70 W | | |
| vacuum cleaner | 800 W | | |

- (b) The fuse in Jo's kettle 'blows' and she does not have a spare. She replaces the fuse with a thick piece of copper wire.**

Explain why this could be extremely dangerous.

[2]

[TOTAL: 5]

- 11 Over 600 years ago, it was noticed that men working in silver mines in the Czech Republic often died from ‘mountain sickness’, which we now know was cancer. It was not until the 20th Century that it was realised that the rocks in the mine were the cause of this damage.**

Explain the meaning of ‘irradiation’ and ‘contamination’, and suggest how they may have caused the damage to these men.

[4]

[TOTAL: 4]

- 12 (a) A heater draws a current of 10 A from the 230 V mains electricity supply.

Calculate the energy transferred IN KILOWATT HOURS (kWh) when the heater is left on for 30 minutes.

energy transferred = _____ kWh [3]

- (b) The lamp in a torch draws a current of 0.6 A from a 3.0 V battery.

Calculate the energy transferred IN JOULES (J) when the torch is left on for 5 minutes.

energy transferred = _____ J [2]

[TOTAL: 5]

END OF QUESTION PAPER

ADDITIONAL ANSWER SPACE

If additional space is required, you should use the following lined page(s). The question number(s) must be clearly shown in the margin(s).

| | |
|--|--|
| | |
| | |
| | |
| | |
| | |
| | |
| | |
| | |
| | |
| | |
| | |
| | |
| | |
| | |
| | |
| | |
| | |
| | |
| | |
| | |
| | |
| | |
| | |
| | |

| | |
|--|--|
| | |
| | |
| | |
| | |
| | |
| | |
| | |
| | |
| | |
| | |
| | |
| | |
| | |
| | |
| | |
| | |
| | |
| | |
| | |
| | |
| | |



Copyright Information

OCR is committed to seeking permission to reproduce all third-party content that it uses in its assessment materials. OCR has attempted to identify and contact all copyright holders whose work is used in this paper. To avoid the issue of disclosure of answer-related information to candidates, all copyright acknowledgements are reproduced in the OCR Copyright Acknowledgements Booklet. This is produced for each series of examinations and is freely available to download from our public website (www.ocr.org.uk) after the live examination series.

If OCR has unwittingly failed to correctly acknowledge or clear any third-party content in this assessment material, OCR will be happy to correct its mistake at the earliest possible opportunity.

For queries or further information please contact the Copyright Team, First Floor, 9 Hills Road, Cambridge CB2 1GE.

OCR is part of the Cambridge Assessment Group; Cambridge Assessment is the brand name of University of Cambridge Local Examinations Syndicate (UCLES), which is itself a department of the University of Cambridge.