

OCR

Oxford Cambridge and RSA

Friday 27 May 2016 – Morning

AS GCE CHEMISTRY A

F321/01 Atoms, Bonds and Groups

Candidates answer on the Question Paper.


OCR supplied materials:

- *Data Sheet for Chemistry A* (inserted)

Other materials required:

- Scientific calculator

Duration: 1 hour




Candidate forename		Candidate surname	
-----------------------	--	----------------------	--

Centre number						Candidate number				
---------------	--	--	--	--	--	------------------	--	--	--	--

INSTRUCTIONS TO CANDIDATES

- The Insert will be found inside this document.
- Write your name, centre number and candidate number in the boxes above. Please write clearly and in capital letters.
- Use black ink. HB pencil may be used for graphs and diagrams only.
- Answer **all** the questions.
- Read each question carefully. Make sure you know what you have to do before starting your answer.
- Write your answer to each question in the space provided. If additional answer space is required, you should use the lined page(s) at the end of this booklet. The question number(s) must be clearly shown.
- Do **not** write in the bar codes.

INFORMATION FOR CANDIDATES

- The number of marks is given in brackets [] at the end of each question or part question.
-  Where you see this icon you will be awarded marks for the quality of written communication in your answer.
This means for example you should:
 - ensure that text is legible and that spelling, punctuation and grammar are accurate so that meaning is clear;
 - organise information clearly and coherently, using specialist vocabulary when appropriate.
- You may use a scientific calculator.
- A copy of the *Data Sheet for Chemistry A* is provided as an insert with this question paper.
- You are advised to show all the steps in any calculations.
- The total number of marks for this paper is **60**.
- This document consists of **16** pages. Any blank pages are indicated.

Answer **all** the questions.

1 Nitrogen is the most common gas in the atmosphere.

(a) Atoms of nitrogen consist of protons, neutrons and electrons.

Complete the table below.

Particle	Relative mass	Relative charge	Position within the atom
Proton			
Neutron			
Electron			shell

[2]

(b) The electrons in the second shell of a nitrogen atom are found in an s-orbital and three p-orbitals.

(i) State, in words, the 3D shape of an s-orbital and a p-orbital.

s-orbital

p-orbital

[1]

(ii) Describe the relative energies of the 2s orbital and **each** of the three 2p orbitals in a nitrogen atom.

.....

.....

..... [2]

(c) Draw a 'dot-and-cross' diagram to show the bonding in a nitrogen molecule.

Show **outer** electrons only.

[1]

- (d) Calculate the amount, in mol, of nitrogen **atoms** in 5.117×10^{20} nitrogen **molecules**.

Give your answer in standard form.

amount of nitrogen atoms = mol [2]

- (e) N_2O_3 is an unstable oxide of nitrogen that decomposes in a redox reaction.



- (i) State the oxidation number of nitrogen in each oxide in the table below.

Oxide	Oxidation number of nitrogen
N_2O_3	
NO	
NO_2	

[1]

- (ii) Name this type of redox reaction.

In your answer you should use appropriate technical terms spelled correctly.

..... [1]

- (f) N_2O_3 reacts with water to form an acid as the only product. This reaction is **not** a redox reaction. The empirical formula of the acid formed is the same as the molecular formula.

- (i) State what is meant by the term *molecular formula*.

.....
 [1]

- (ii) Suggest the empirical formula of the acid formed.

empirical formula of acid = [1]

[Total: 12]

Turn over

2 This question is about halogens.

(a) Solid chlorine and solid bromine have a similar structure.

Name this structure.

..... [1]

(b) The intermolecular attractions in halogens are van der Waals' forces.

(i) Explain how van der Waals' forces arise between halogen molecules.

.....
.....
.....
.....
.....
.....
.....
.....
.....
.....
..... [3]

(ii) The boiling points of chlorine and bromine are shown in the table.

Halogen	Boiling point / °C
chlorine	-34
bromine	59

Explain why bromine has a higher boiling point than chlorine.

.....
.....
.....
.....
..... [2]

3 The elements of Period 2 and Period 3 of the Periodic Table are shown in **Table 3.1**.

Group	1	2	3	4	5	6	7	0
Period 2	Li	Be	B	C	N	O	F	Ne
Period 3	Na	Mg	Al	Si	P	S	Cl	Ar

Table 3.1

(a) The elements in these two periods show a repeating pattern in chemical and physical properties.

What is the name given to this repeating pattern of properties?

..... [1]

(b) State the element in **Table 3.1** with:

- the lowest first ionisation energy
- the lowest fourth ionisation energy
- the lowest boiling point

[3]

(c) Gallium, atomic number 31, is in Period 4 of the Periodic Table. Gallium is a Group 3 element.

Predict the formula of a gallium ion.

..... [1]

(f) Fluorine forms several compounds with sulfur and with oxygen.

- (i) Give the **formula** and the **name** of the compound formed between fluorine and sulfur which has octahedral molecules.

Formula

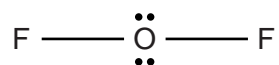
Name [1]

- (ii) Fluorine reacts with aqueous sodium hydroxide to form the oxide F_2O . Two other products are also formed. One product is an ionic compound with a relative formula mass of 42.0.

Construct a balanced equation for this reaction.

..... [2]

- (g) (i) Fluorine is the most electronegative element. Indicate any dipoles on the molecule of F_2O below using partial charges.



[1]

- (ii) Suggest the **shape** of the F_2O molecule and the **F–O–F bond angle**.

Shape

Bond angle

[1]

- (iii) What is the oxidation number of oxygen in F_2O ?

Include the sign in your answer.

..... [1]

[Total: 17]

PLEASE DO NOT WRITE ON THIS PAGE

Turn over for the next question

4 This question is about the chemistry of the metals zinc, magnesium, aluminium and calcium.

(a) Complete the electron configuration of a zinc atom.

1s² [1]

(b) A sample of zinc was found to contain four isotopes with the abundances shown in the table.

Isotope	Abundance (%)
⁶⁴ Zn	49.0
⁶⁶ Zn	27.9
⁶⁷ Zn	4.3
⁶⁸ Zn	18.8

(i) Define the term *relative atomic mass*.

.....

 [3]

(ii) Calculate the relative atomic mass of zinc in this sample.

Give your answer to **two** decimal places.

relative atomic mass of zinc = [2]

- (c) Zinc carbonate, ZnCO_3 , reacts with dilute hydrochloric acid.

A student reacts a sample of ZnCO_3 with an excess of dilute hydrochloric acid in a test-tube.

- (i) Describe what the student would see during this reaction.

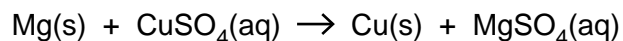
.....
 [1]

- (ii) Write the equation for the reaction between ZnCO_3 and dilute hydrochloric acid.

..... [1]

- (d) Magnesium will undergo redox reactions with aqueous salts of less reactive metals.

- (i) A student reacts magnesium with aqueous copper(II) sulfate.



Explain, in terms of **numbers** of electron transferred, the redox processes taking place in this reaction.

.....

 [2]

- (ii) The student also noticed that the magnesium started fizzing.

The student thought the fizzing was due to the magnesium reacting with water in the mixture.

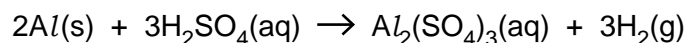
Write the equation for the reaction of magnesium with water.

Include state symbols.

..... [2]

- (e) A student reacts 35.0 cm^3 of $3.00 \times 10^{-2}\text{ mol dm}^{-3}$ $\text{H}_2\text{SO}_4(\text{aq})$ with an excess of Al .

An equation for this reaction is shown.



Calculate the mass, in g, of $\text{Al}_2(\text{SO}_4)_3$ formed in solution.

Give your answer to **three** significant figures.

Show your working.

mass = g [4]

- (f) Compounds of calcium have many uses.

- (i) Identify a compound of calcium that could be used to convert a soil pH from 5.8 to 7.5.

..... [1]

- (ii) Calcium phosphide, Ca_3P_2 , is an ionic compound used in rat poison.

Calcium phosphide can be prepared by reacting calcium metal with phosphorus, P_4 .

Write the equation for the reaction of calcium with phosphorus to form calcium phosphide.

..... [1]

- (iii) Draw a '*dot-and-cross*' diagram to show the bonding in calcium phosphide, Ca_3P_2 .
Show **outer** electrons only.

[2]

[Total: 20]

END OF QUESTION PAPER

ADDITIONAL ANSWER SPACE

If additional space is required, you should use the following lined page(s). The question number(s) must be clearly shown in the margin(s).

A large area of lined paper for writing. It features a vertical solid line on the left side, creating a margin. The rest of the page is filled with horizontal dotted lines, providing space for writing answers.

A large rectangular area with a solid vertical line on the left side and horizontal dotted lines extending across the page, providing a grid for writing answers.



Copyright Information

OCR is committed to seeking permission to reproduce all third-party content that it uses in its assessment materials. OCR has attempted to identify and contact all copyright holders whose work is used in this paper. To avoid the issue of disclosure of answer-related information to candidates, all copyright acknowledgements are reproduced in the OCR Copyright Acknowledgements Booklet. This is produced for each series of examinations and is freely available to download from our public website (www.ocr.org.uk) after the live examination series.

If OCR has unwittingly failed to correctly acknowledge or clear any third-party content in this assessment material, OCR will be happy to correct its mistake at the earliest possible opportunity.

For queries or further information please contact the Copyright Team, First Floor, 9 Hills Road, Cambridge CB2 1GE.

OCR is part of the Cambridge Assessment Group; Cambridge Assessment is the brand name of University of Cambridge Local Examinations Syndicate (UCLES), which is itself a department of the University of Cambridge.